
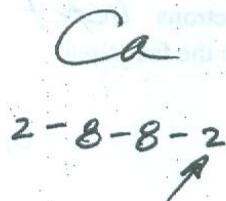

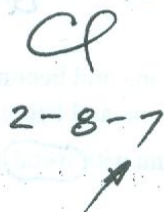




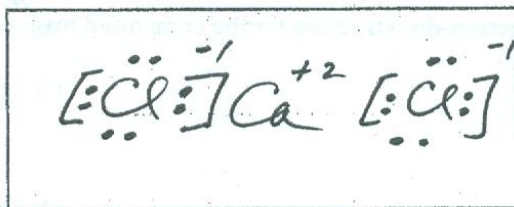
12) In the box below, draw the electron-dot (Lewis) structure of an atom of calcium.



13) In the box below, draw the electron-dot (Lewis) structure of an atom of chlorine.



14) In the box below, draw the electron-dot (Lewis) structure of calcium chloride.



15) In the box below, draw the electron-dot (Lewis) structure of calcium oxide (an ionic compound).

